





- Sayıları yazalım (1).

| | | |
|---|---|---|
| 1 |  |  |
|---|---|---|

| | | |
|---|---|---|
| 2 |  |  |
|---|---|---|

| | | |
|---|--|--|
| 3 |  |  |
|---|--|--|

- Kutulardaki eksik rakamı bulalım.


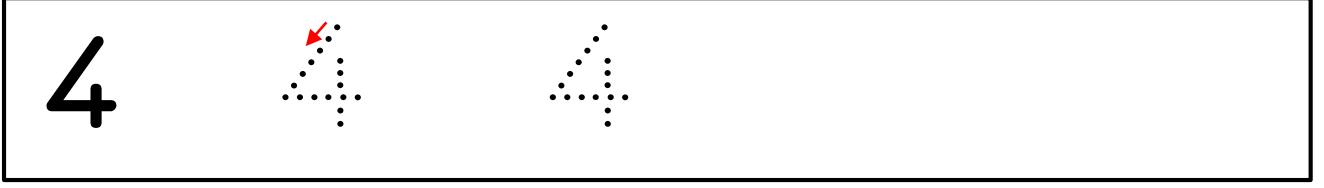
1 2 3 4 5 6 7 8 9

| |
|-------------|
| 1 _ 3 4 _ 6 |
|-------------|

| |
|---------------|
| _ 2 _ 4 5 _ 7 |
|---------------|



- Sayıları yazalım (2).



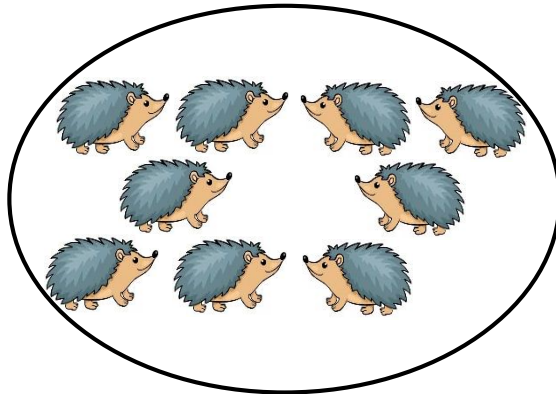



- Eşleştirelim



Aşağıda gördüğünüz vahşi hayvanların adını söyleyelim.

Uygun rakam ile çizerek eşleştirelim.

1 2 3 4 5 6 7 8 9



- Sayıları yazalım (3).



- Örüntü Çalışması
Boş olan yere hangi hayvan yerleşmeli?

